

HUNGER GAMES

Map Activity





LUXURY



MASONRY



TECHNOLOGY



FISHING



POWER



TRANSPORTATION



LUMBER



TEXTILES



GRAIN



LIVESTOCK



AGRICULTURE



MINING



1

MARVEL


GLIMMER



2

CATO

CLOVE



3

TRIBUTE
BOY

TRIBUTE
GIRL



4

TRIBUTE
BOY

TRIBUTE
GIRL



5

TRIBUTE
BOY

FOXFACE
BOY



6

TRIBUTE
BOY

TRIBUTE
GIRL



7

TRIBUTE
BOY

TRIBUTE
GIRL



8

TRIBUTE
BOY

TRIBUTE
GIRL



9

TRIBUTE
BOY

TRIBUTE
GIRL



10

TRIBUTE
BOY

TRIBUTE
GIRL



11

THRESH

RUE



12

PEETA
MELLARK

KATNISS
EVERDEEN

Where would the 13 districts be located?



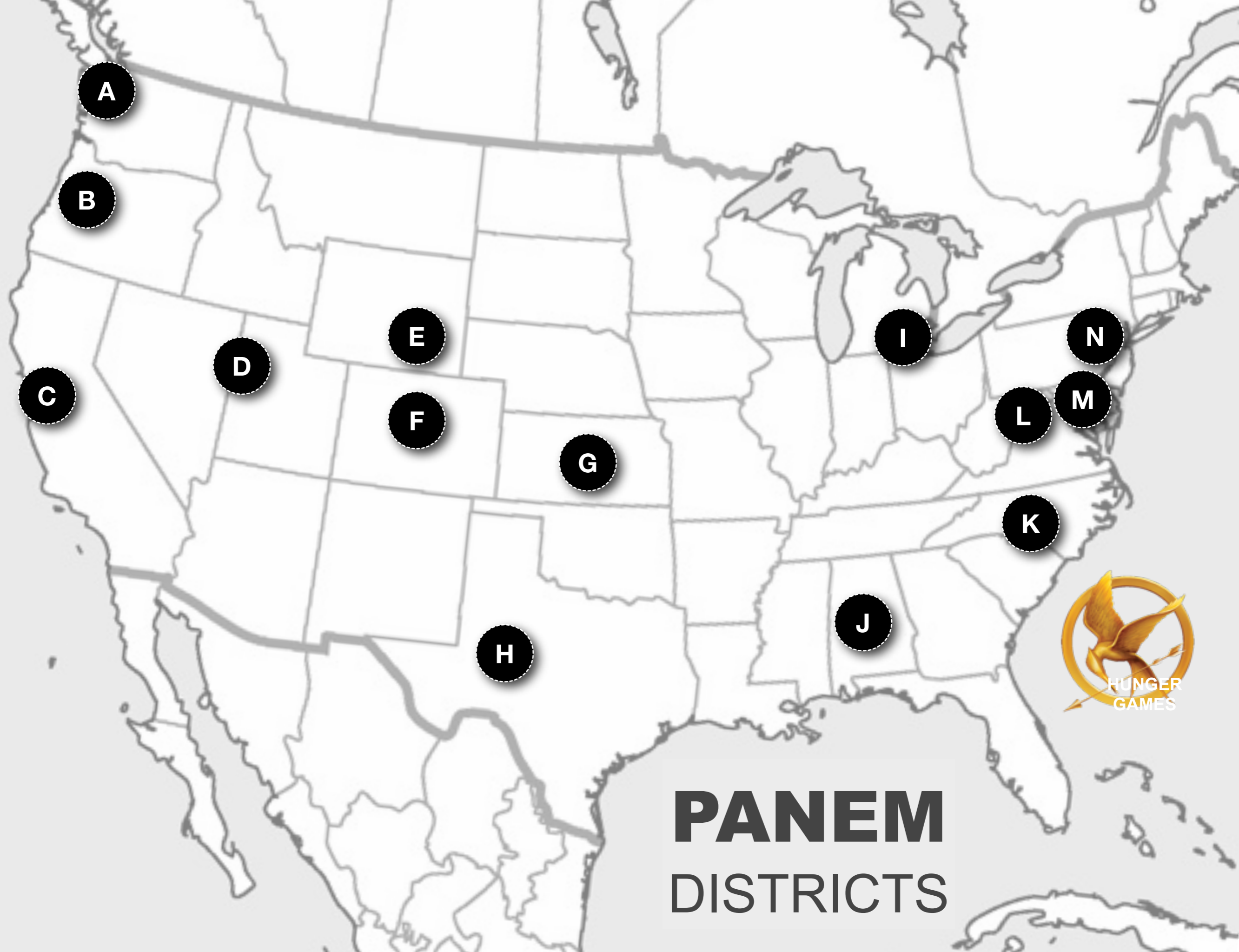
PANEM DISTRICTS

The Hunger Games Map Activity

Name; _____

Answer (letter)	District / Description	Location: Region/State/City, Climate, Topography	Alternative Location(s)	Race/Ethnic Makeup	Specific Economic Activities (in addition to what is listed)
	The Capitol	<i>Northwestern Rocky Mountains Denver (Area), Colorado</i>	<i>None</i>	Predominantly White Cosmopolitan Mix of Population	Services as found in a large metropolitan city.
	1 Luxury (diamonds)				
	2 Masonry (minerals)				
	3 Technology (computers)				
	4 Fishing				
	5 Power (nuclear)				
	6 Transportation				
	7 Lumber				
	8 Textiles				
	9 Grain (wheat)				
	10 Livestock				
	11 Agriculture (cotton)				
	12 Mining (coal)				
	13 Nuclear & Graphite				

Possible Answers...



A

B

C

D

E

F

G

H

I

J

L

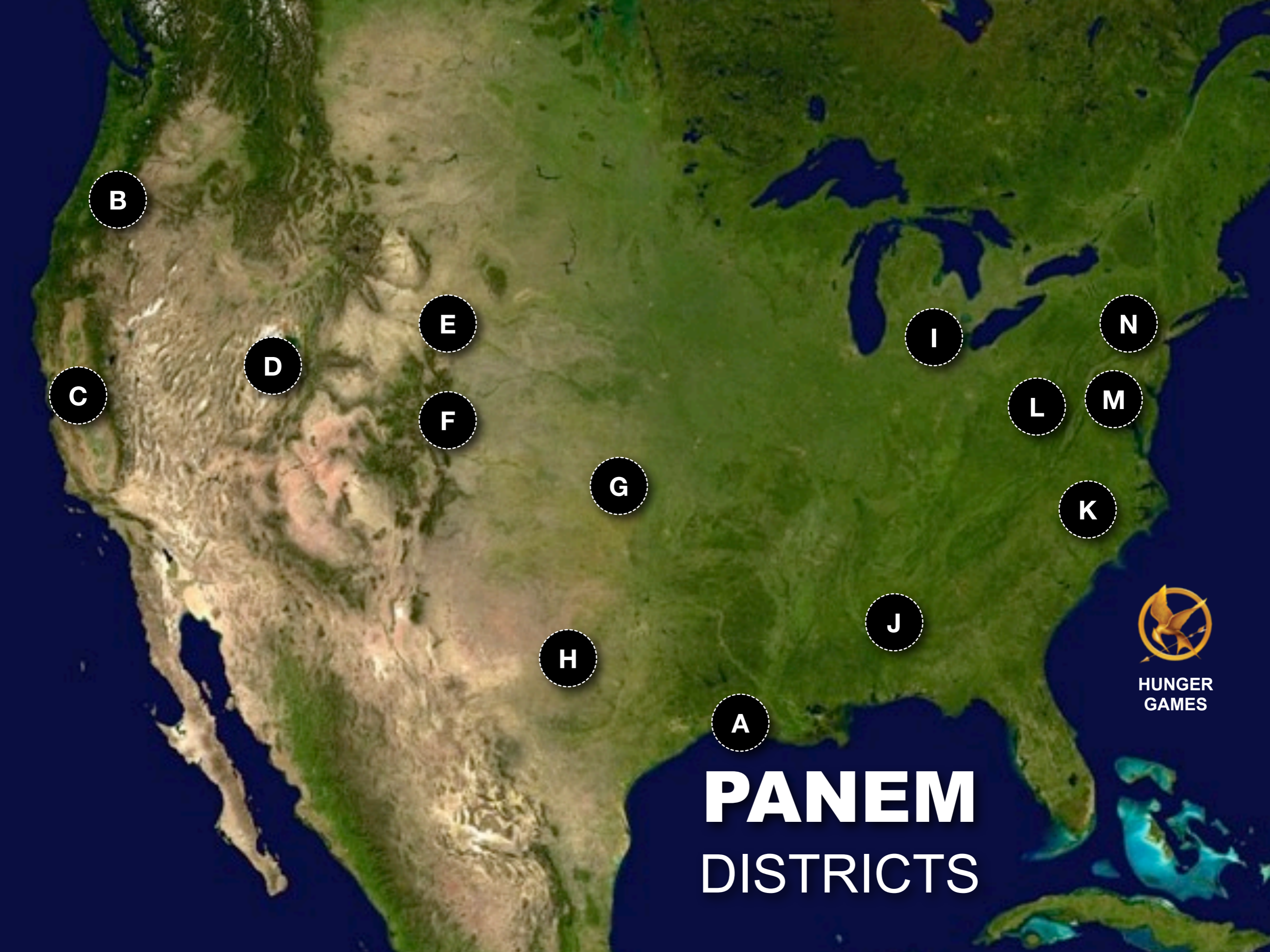
M

K

N



PANEM DISTRICTS



HUNGER
GAMES

PANEM DISTRICTS